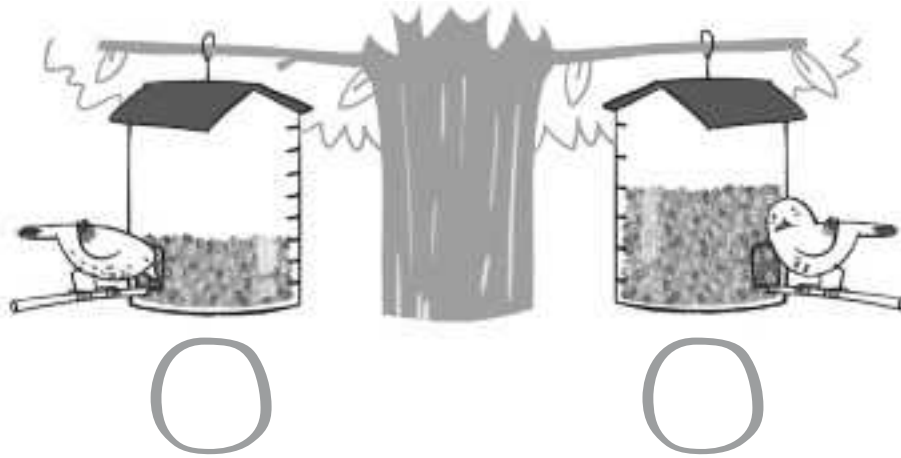


1 Escribe la fracción que representa la cantidad de comida que hay en estos comederos de pájaro.




2 Relaciona cada fracción con la representación que corresponde.


$$\frac{3}{8}$$




$$\frac{1}{10}$$



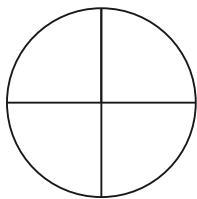
$$\frac{5}{5}$$



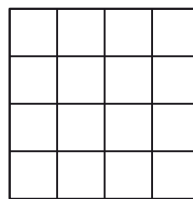
$$\frac{4}{6}$$



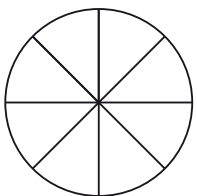
3 Colorea la fracción que se indica en cada caso.



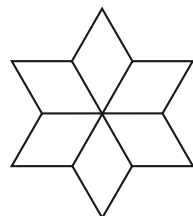
$$\frac{3}{4}$$



$$\frac{11}{16}$$



$$\frac{8}{8}$$



$$\frac{2}{6}$$