



Nombre _____ Fecha _____


1 Completa.



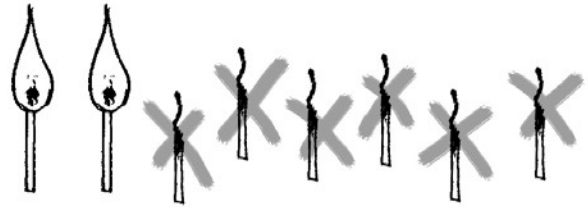
$$\boxed{5} - \boxed{3} = \boxed{2}$$




$$\boxed{} - \boxed{} = \boxed{}$$



$$\boxed{} - \boxed{} = \boxed{}$$



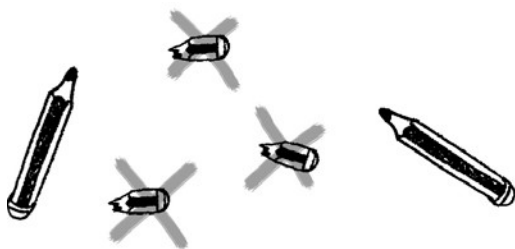
$$\boxed{} - \boxed{} = \boxed{}$$



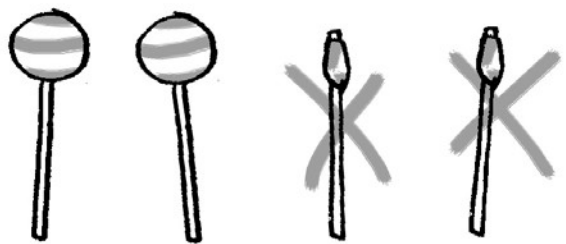
$$\boxed{} - \boxed{} = \boxed{}$$



$$\boxed{} - \boxed{} = \boxed{}$$



$$\boxed{} - \boxed{} = \boxed{}$$



$$\boxed{} - \boxed{} = \boxed{}$$