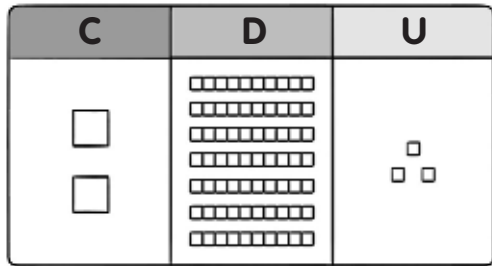


Nombre _____ Fecha _____

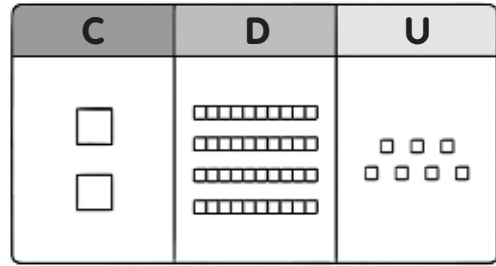
REFUERZO

1 Completa.



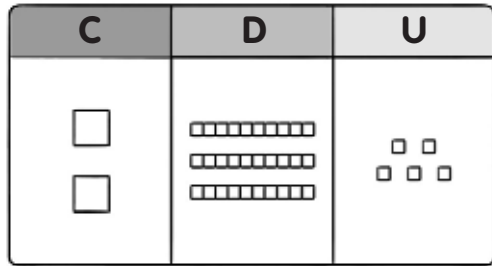
C + D + U

+ + =



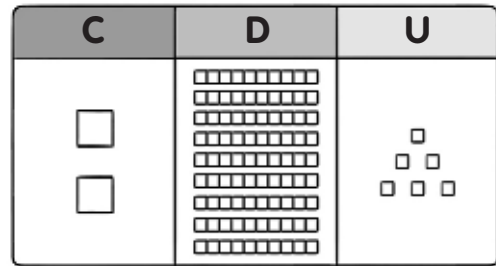
C + D + U

+ + =



C + D + U

+ + =



C + D + U

+ + =

2 Representa cada número en el ábaco.

