




Nombre _____ Fecha _____

1 Completa y suma.





$$\begin{array}{r} 4 \\ 2 \\ + 3 \\ \hline 9 \end{array}$$

$$4 + \square + \square = \square$$



$$\begin{array}{r} 3 \\ \square \\ + \square \\ \hline \square \end{array}$$

$$3 + \square + \square = \square$$



$$\begin{array}{r} \square \\ \square \\ + \square \\ \hline \square \end{array}$$

$$\square + \square + \square = \square$$