


Nombre \_\_\_\_\_ Fecha \_\_\_\_\_

1 Cuenta, completa y escribe.




1 decena y 6 unidades

$$10 + 6 = \square$$

dieciséis

D	U




decena y  unidades

$$\square + \square = \square$$

\_\_\_\_\_

D	U




decena y  unidades

$$\square + \square = \square$$

\_\_\_\_\_

D	U



decena y  unidades

$$\square + \square = \square$$

\_\_\_\_\_

D	U