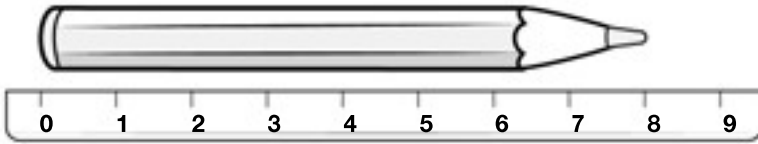
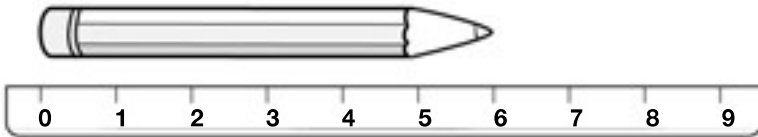


3 ¿Cuánto mide cada lápiz? Observa y completa.



Mide  centímetros.



Mide  centímetros.

4 Calcula las sumas.


$$\begin{array}{r} 3 \\ 4 \\ + 1 \\ \hline \square \end{array}$$

$$\begin{array}{r} 2 \\ 2 \\ + 5 \\ \hline \square \end{array}$$

$$\begin{array}{r} 5 \\ 6 \\ + 2 \\ \hline \square \end{array}$$

$$\begin{array}{r} 8 \\ 2 \\ + 7 \\ \hline \square \end{array}$$

5 ¿Qué número es? Completa y escribe cómo se lee.



►  decenas y  unidades


---



---



---



►  decenas y  unidades

---



---



---