

PRIMER TRIMESTRE
Unidad 2. Matemáticas

AR

Nombre y apellidos:

Curso: Fecha:


 Escribe los números.

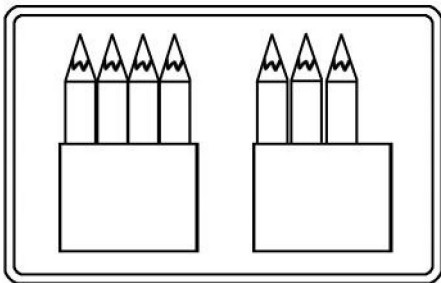
5 5

6 6

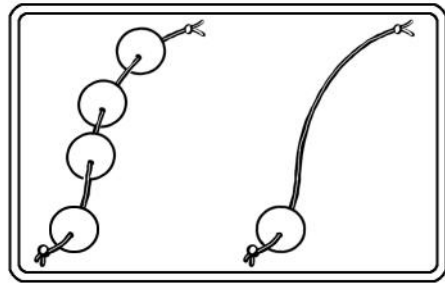
7 7

0 0


 Cuenta y calcula.




$$\boxed{4} + \boxed{} = \boxed{}$$



$$\boxed{4} + \boxed{} = \boxed{}$$



$$\boxed{5} - \boxed{} = \boxed{}$$



$$\boxed{4} - \boxed{} = \boxed{}$$